

SURE KEY EXAMINATIONS BOARD
PRIMARY LEAVING EXAMINATION

2020

SOCIAL STUDIES WITH RELIGIOUS EDUCATION
FINAL BLUE PRINT

SECTION A

1. **Mention one school symbol.**

- | | | |
|----------------|------------------|-----------------|
| -School badge | -School signpost | -School uniform |
| -School anthem | -School flag | -School Motto |

2. **State one duty of a class monitor.**

- | | |
|---|------------------------------|
| -To collect books for marking. | -To protect class properties |
| -To settle disputes among other classmates. | -To promote morals |
| -To promote order in a class | -To guide and counsel others |
| -To promote sanitation/cleanliness | |

3. **Identify one way of controlling COVID 19.**

- | | |
|--|-------------------------------------|
| -Through wearing a face mask | -Through eating nutritious food |
| -Through observing social distancing | -Through sanitizing hands regularly |
| -Through washing hands with soap regularly | -Through avoiding mass gatherings |
| -Through avoiding public means of transport | -Through vaccination |
| -Through mass sensitisation on Covid 19 | - Through enforcing lockdown |
| -Through reporting suspected cases to the ministry of health | |
| -Through isolating suspected Covid 19 patients and contacts. | |
| -Through quarantining Covid 19 patients | |

4. **State one role played by a CAO at a district level.**

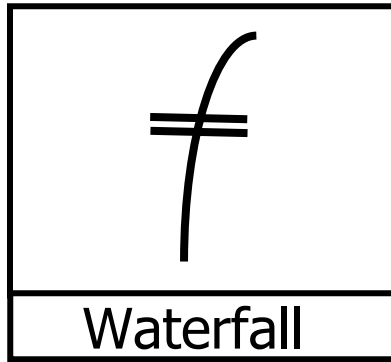
- | | |
|--------------------------------|------------------------------|
| -To account for district funds | -To supervise Civil servants |
| -To pay Civil servants | -To conduct civil marriage |

5. **How does a national language promote trade?**

- It makes communication easy
- It enables a buyer to bargain
- It promotes peace and security
- It promotes unity
- It promotes friendship

6. **Mention one reason for holding free and fair elections in a country like Uganda.**
- To promote peaceful change of government
 - To promote respect for human rights
 - To promote constitutional rule
 - To promote democracy
 - To promote peace
 - To promote security
7. **Why did colonialists construct roads and railway lines in East Africa?**
- To ease administration
 - To promote trade
 - To ease transportation of goods
 - To promote peace and security
 - To promote investment
 - To end slave trade
 - To promote/ develop Agriculture
 - To promote development
 - To link different places
8. **How are natural forests important to carpenters?**
- They provide wood/timber for making furniture.
9. **State one way of controlling poverty in a country.**
- Through discouraging laziness
 - Encouraging the growing of traditional cash crops
 - Through promoting peace and security
 - Through creating market for goods
 - Through promoting and modernizing agriculture
 - Through improving transport Network
 - Through giving loans to people
 - By starting up businesses
 - Through setting up projects
 - Through promoting industrialization
10. **Give one duty of the parliament of Uganda.**
- To approve the national budget
 - To amend laws
 - To approve ministers and other officials appointed by the president
 - To make laws
 - To check government expenditure
 - To discuss national issues
11. **Mention one detail/information collected during national population census.**
- Date of birth
 - Household items
 - Number of animals
 - Age
 - Marital status
 - Number of children
 - Sex
 - Education status
 - Occupation
12. **How can crop growing be done successfully in drier areas of Uganda?**
- By irrigation/ watering
13. **State one cause of child abuse.**
- Indiscipline among Children
 - Poverty
 - Ignorance among people
 - Lack of strict laws against child abuse
 - Death of parents
 - Unemployment
 - Civil wars/ Rebel activities
 - Alcoholism

14. **What does the symbol below represent on a map?**



15. **Give one problem faced by the government of Uganda when providing social services to its citizens.**

- Shortage of funds
- High population
- Shortage of skilled labour
- Corruption
- Hostile tribes/ poor response from people
- Ignorance among people
- Remoteness of some areas

16. **Give one way Corona Virus has affected people in Uganda.**

- It has led to school dropouts
- Has led to closure of some schools
- Has improved on science and technology
- It has increased poverty
- Has increased unwanted pregnancies
- Has increased domestic violence
- Has led to lockdown and curfew
- Has led to unemployment
- Has increased the number of orphans, widows and widowers.
- It has retarded trade activities
- Has led to death of people
- Has retarded tourism
- Has led to closure of airports, bars.
- Has increased on government expenditure

17. **State one reason for the formation of OAU in 1963.**

- To promote peace and security
- To promote unity
- To promote friendship and cooperation
- To promote solidarity
- To promote respect for human rights
- To preserve African culture
- To end colonialism
- To end apartheid and colour bar

18. **State the major duty of Uganda Police.**

- To enforce / keep law and order

19. **How is Blue Nile related to River Nile?**

- It is the major tributary of river Nile.
- Blue Nile is a tributary of River Nile.

20. **Identify one crop introduced by the Portuguese in East Africa.**

- Yellow maize/Maize
- Pawpaw/papaya
- Pineapple
- Sweet potato
- Cassava
- Guavas

21. **How did early man obtain food?**

- Through gathering wild fruit and honey
- Through hunting
- Through fishing
- Through farming

22. **State one way of promoting the tourism sector.**
 -By building better hotels and lodges -By constructing better roads
 -By advertising tourist attractions on international media
 -By promoting peace and security
 -By setting up more tourist centres/game parks/Game reserve.
 -By protecting existing forests, game parks and game reserves
 -By discouraging poaching -By protecting wildlife
 -By discouraging encroachment in game parks and forests.
23. **Why did the government of Uganda introduce Universal Primary Education?**
 -To reduce on illiteracy -To fight poverty -To create jobs
 -To enable the poor to attain education -To promote development
24. **How does the government of Uganda ensure proper spending of her revenue it collects from her citizens?**
 -By preparing a national budget
25. **Mention any one activity that the Bachwezi are remembered for in Uganda.**
 -Growing coffee -Iron smelting/working -Pottery
 -Bark cloth making -Salt mining
 -Cattle keeping (Long horned cattle)
26. **Name one tribe that belongs to the River-Lake Nilotes.**
 -Japadhola -Acholi -Jaluo
 -Alur -Dinka
27. **Give one method used to control soil erosion in hilly areas of Uganda.**
 -Terracing -Strip cropping -Contour ploughing
 -Planting trees -Planting cover crops
28. **State one economic benefit of coral reefs.**
 -Promote tourism -Used for making cement
 -Used for making pumice stones for sale.
29. **State one reason why Arabica coffee does well on the slopes of mountain Elgon.**
 -There is fertile volcanic soils
 -There is enough rainfalls received/ favourable climate
30. **What is smuggling?**
 -Is the illegal importation and exportation of goods

39. **Name the body that was replaced by the African Union.**
-OAU/Organization of African Unity
40. **Mention one problem faced by the builders of the Uganda railway.**
-Shortage of food -Attacks from hostile tribes (Nandi, Maasai)
-Shortage of construction materials/equipment -Shortage of water
-Poor pay/ under payment -Attacks from tropical diseases (jiggers)
-Attack from dangerous wild animals/man-eaters (lions)
41. **What are economic activities?**
-These are activities people do to earn a living/money.
42. **Name the global pandemic disease that has slowed down the development of the world.**
-COVID-19/ Corona virus disease
43. **How is a time table important in a classroom?**
-Promotes order in a classroom -Shows the flow of activities in a class
-Promotes time management -Controls/ prevents collision
-Helps us to know the next lesson/subject
-Helps teachers to make enough preparations
44. **Give one reason why some people fail to get basic needs for themselves.**
-Due to laziness -Due to sickness -Due to corruption
-Due to pandemic diseases -Due to Civil wars/conflicts
-Due to ignorance -Due to poverty -Due to unemployment
-Due to illiteracy -Due to some religious beliefs -Due to witchcraft
45. **How are commercial banks important to traders?**
-They give loans to traders -They keep traders money safely
-They keep traders important documents (Wills, land title, academic documents)
-Give financial advice to traders
46. **What role is played by the parliament in the budget making process?**
-It approves the budget (national budget)
47. **Name the type of roads that are commonly constructed in hilly and mountainous areas.**
-Winding roads

48. **Name the road sign shown below.**



49. **Give one activity done by farmers during wet seasons.**

- Planting/planting crops
- Weeding
- Collecting water for irrigation
- Thinning

50. **Name one river that pours its water to Lake Victoria.**

- River Kagera
- River Katonga
- River Nzoia
- River Yala
- River Mara
- River Nyando
- River Bukora

51. **Give one example of a primary industry.**

- Fishing
- Mining
- Agriculture/farming
- Lumbering

52. **Mention way the government of Uganda has tried to control the spread of Corona Virus which is a global threat today.**

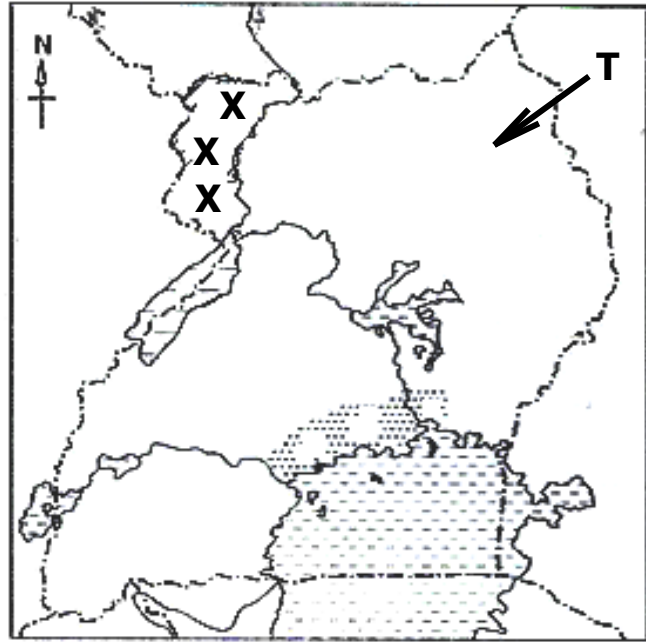
- By advising people to wear face masks
- By encouraging scientific weddings
- By organising scientific campaigns/elections
- By enforcing curfew.
- By discouraging mass gatherings
- By closing open/public/community markets
- By importing COVID 19 vaccines
- By advising people to be vaccinated
- By encouraging scientific burial
- By discouraging mass wedding
- By advising people to observe social distancing
- By enforcing lockdown
- By advising people to sanitize frequently
- By Closing schools
- By advising people to wash hands frequently with soap
- By Closing churches
- By advising people to eat nutritious food
- By Closing airports
- By advising people to engage in physical exercises
- By publishing and displaying poster on preventive measures of covid 19
- By advising people to report COVID 19 related cases.
- By discouraging use of public means of transport
- By Closing bars and night clubs

53. **What lastly led to the collapse of BunyoroKitaraempire?**

- Coming of the Lou speakers/ Luo invasion

54. **State the title given to the political head of a Municipality.**
-Mayor
55. **Why was James Grant sent together with John Speke to Uganda?**
-To prove whether Lake Victoria was the source of river Nile
56. **Give one reason why school children should be given holidays at the end of the term.**
-To relax their minds
-To visit their relatives and friends
-To learn domestic chores/work
-To learn their culture
-To make personal research
-To interact with their parents
57. **How does a good transport network help to promote tourism in Uganda?**
-It eases the transportation of tourists.
-It eases the provision of services to tourists
-It motivates and encourages the coming of tourists
-It promotes peace and security
58. **Name the type of tax paid on imported goods.**
-Import tax/Custom duty
59. **How does improved medical services lead to population growth?**
-It reduces on infant mortality rate
-It promotes safe and healthy birth delivery of babies
-People get better health services which reduces on the death rates
60. **State one negative effect of too much rainfall in our community.**
-Causes floods
-Causes soil erosion
-Delays people's activities
-Destroys people's property/crops
-Causes landslides
-Destroys bridges
-Blocks transport
-Leads to death of people
61. **Mention one problem faced by Uganda Wildlife Authority as it does its duties.**
-Shortage of funds
-Shortage of skilled workers
-Outbreak of animals diseases
-Encroachment
-Attacks from dangerous wild animals
-Corruption
-Poor government policies
-Outbreak of wild fire
-Poaching
62. **Name the military wing that is responsible for ensuring peace and security in ECOWAS member states.**
-ECOMOG/Economic Community of West African States Monitoring Group

Study the map of Uganda below and use it to answer questions 62 and 63



63. **Name the type of coffee grown in region marked xxxx.**
-Robusta coffee
64. **Mention one tribe that belongs to the Ethnic group that used the route labeled T.**
-Karimojong/Karamojong
-Langi
-Iteso
-Kumam
65. **Why are perishable goods exported to outside countries by air transport means?**
-Air transport means are very fast/quick
-Air transport means save time
66. **How did the construction of the Uganda railway help to control slave trade?**
-Trains started carrying goods which were carried by slaves
-It eased the movement of soldiers who patrolled the area.
67. **State one factor that led to the rise and expansion of Buganda kingdom.**
-Presence of Lake Victoria
-Presence of enough rainfall
-Presence of able/strong leaders
-Participation in trade activities
-Presence of fertile soil
-Presence of guns
-Unity among people
68. **Give one political event that happened in Uganda on 9th October 1962.**
-Uganda gained her independence
-The Union Jack (British flag) was lowered
-The Uganda national anthem was sung for the first time
-Duke of Kent handed over the powers of instruments to Dr Apollo Milton Obote
-Independence celebrations
-The Uganda flag was raised

69. **Why did traders move in caravans during Trans-Saharan trade?**
 -For protection against dangerous wild animals
 -To increase economies of scale
 -For protection against enemies(hostile tribes) -To carry a lot of goods
70. **Name the organization that unites together Britain with her former colonies and protectorates.**
 -The Commonwealth /The Commonwealth Organisation
 -The Commonwealth of Nations(CWN)
71. **Which country shares a border with Tanzania to the south?**
 -Mozambique
72. **Why is a rain gauge not kept in a Stevenson's Screen?**
 -It is not a delicate weather instrument
 -A rain gauge can't collect and measure rainfall received when put in a stevenson screen.
73. **How did the British promote cash crop growing in Uganda?**
 -Introduced new cash crops
 -They gave New Cash crops to local chiefs who supplied them to the natives.
 -They provided market to cash crops
 -They taught people better farming methods
 -They built roads and railway lines
 -They set up Agro based industries.
74. **How can one become a member of the East African Legislative Assembly?**
 -After being elected from the parliament of one of the member countries of the East African Community.
 -Through elections.
75. **Give any one way parents can promote proper health for children.**
 -Taking them for vaccination/ immunisation
 -By feeding them on nutritious food/balanced diet
 -By encouraging them to wash hands using soap frequently
 -By buying face masks for their children -By advising them to sanitize frequently
 -By allowing them to engage in physical exercises
 -By taking them to health centres or hospital when they fall sick.
76. **State any one condition that can lead to holding of aby-election.**
 -Death of the post holder (incumbent)
 -Exilement of the post holder/political leader
 -Retirement of the post holder
 -Vote of no confidence
 -Resignation of the post holder
 -Election malpractices
 -Insanity of the post holder (mental illness)
 -Lack of academic qualifications

77. **Give any one way the government gets information from people.**

- Through its spy network ie ISO,ESO, GISO, RDC, POLICE,
- Through social media
- Through passports
- Through its administrators
- Through Uganda National Examination Board [UNEB]
- Through telecommunication companies
- Through Geo polls/surveys
- Through cultural leaders
- Through community policing
- Through population census
- Through national identification cards
- Through birth and death certificates
- Through Mass media
- Through local leaders
- Through religious leaders
- Through population census data.

78. **How does Lake Victoria promote the growth of industries in East Africa?**

- Provides water for mixing chemicals
- Promote fishing which is a source of raw material to fish processing industries
- Provides water for cooling machines

79. **Why do most families in Uganda have deficit budgets?**

- They lack jobs/unemployment
- They are poor/poverty
- Due to increased loans and debts
- Due to poor government policies
- Due to big family size
- Due to sickness
- Due to lack of financial advice
- Due to corruption

80. **Draw a road sign to show a school ahead.**



81. **State any one importance of belonging to a family.**

- Promotes love
- There is enough parental care
- It promotes peace and security
- One learns the family members
- Promotes morals
- It promotes unity
- It promotes identity
- It is a source of basic needs
- It promotes culture
- It promotes friendship

82. **Give any one way countries benefit from minerals.**

- They get raw materials for some industries
- They are sources of income
- They promote industrialization
- They create employment
- They are sources of government revenue
- They lead to development of infrastructures

83. **Why does Savanna vegetation cover most parts of East Africa?**
 -It is due to presence of tropical climate experienced in most parts of East Africa
84. **How did the Royal Geographical society ease the exploration of East Africa?**
 -It sponsored/ funded exploration journeys to East Africa.
85. **How do farmers benefit from a veterinary shop in an area?**
 -They access drugs/medicine for their animals (sick)
 -They access veterinary services
86. **Give any one peaceful method Africans used to demand for independence.**
 -They formed political parties -Formed associations
 -Wrote articles in Newspapers exhibiting the evils of the colonialists
 -Organised political rallies -Boycotted European goods
87. **Give any one example of political organisations in pre-colonial Uganda.**
 -They had empires -They had kingdoms
 -They had principalities -They had chiefdoms
88. **Why is irrigation farming not practiced in some areas?**
 -Some areas receive enough rainfall
 -Some areas lack reliable source of water
89. **How did the first Ugandans become members of the LEGCO?**
 -Through nomination/appointment
90. **Give any one danger caused by drought in an area.**
 -Leads to shortage of water -Leads to shortage of pasture
 -Leads to shortage of food/famine -Leads to wilting of crops
 -Leads to death of people and animals -Leads to migration
 -Leads to poverty -Leads to underdevelopment
91. **Why are most towns in East Africa densely populated?**
 -There is enough employment opportunities
 -There is better social services(banking, transport, communication, security, housing, Education, health, electricity, piped water etc)
 -There is ready market for goods
92. **Mention any one local material used for building a house.**
 -Mud/soil/clay/cow dung. -Poles/sticks -Reeds/Papyrus
 -Grass/banana fibre/sisal

93. **Why do people living in hot areas wear light clothes?**
 -To manage hot weather
 -To reduce on heat in the body
94. **Name the perennial crop which is commonly grown in a swamp.**
 -Sugarcane
95. **What time is it in Nairobi-Kenya if it is 8:00 p.m. in Kampala –Uganda?**
 -8:00 p.m.
96. **Give any one role of leaders in promoting peace.**
 -They guide and counsel people -They preach/promote reconciliation
 -They discourage violent acts -They discourage antisocial behavior
 -They settle disputes /conflicts/misunderstandings among people
 -They promote social activities
97. **Why did the early missionaries in East Africa teach people practical skills?**
 -To start self projects
 -To create employment -To fight poverty -To increase sources of income
 -To improve people's living standards -To reduce dependency
98. **Give any one way the government of Uganda has tried to fight poverty among people.**
 -Through giving grants -Through creating market for goods
 -Through promoting vocational training institutions
 -Through promoting peace and security -Through operation wealth creation
 -Through promoting UPE,USE,ABEK ,COPE -Teaching good farming methods
 -Through provision of free vaccination/ immunisation service to Children.
 -Reducing interest on loans given to people -Promoting industrialization
 -Through advising people to form SACCOs -Through rural electrification
 -Through advising people to work hard. -Through construction of better roads
 -Through reducing taxes imposed on traders and farmers
 -Through Teaching people the importance of saving money.
99. **Mention any one proper way of managing plastic waste materials.**
 -Through recycling plastic materials -Reusing plastic materials
 -Through disposing them into rubbish pits
 -Through disposing them into trash cans/dustbins
 -Reducing the production of plastic wastes
 -Returning them to manufacturers
 -Rejecting the production of plastic materials

100. **Give any one reason why plantation farming is expensive.**
-It requires a large piece of land -It requires skilled labour
-It requires many workers -It requires the use of machines
101. **How does the rift valley affect the development of transport?**
-It hinders the construction of transport Networks
102. **State the main source of revenue for the government of Uganda.**
-Taxes/taxation -Tourism -Imports and Exports
-Loans -Grants -Donations.
103. **How did Tanzania become a member of Common Wealth?**
-Through her colonial ties with Britain
-Through gaining independence from Britain
104. **Which climate in East Africa is hot and wet throughout the year?**
-Equatorial climate
105. **Mention any one material early man used to make fire.**
-Dry wood
-Stones

RELIGIOUS EDUCATION.

106. **EITHER: Why did God create Adam?**
-To look after other creatures -To procreate -To till land
-To worship Him
- OR: Why did Allah create Adam?**
-To look after other creatures -To procreate -To till land
-To worship Him
107. **EITHER: State one way Christians show respect to God during prayers.**
-They close their eyes -They kneel down -They stand still
-They humble themselves -They close their doors
- OR: State one way Muslims show respect to Allah during Salat.**
-They remove their shoes -They kneel down
-They humble themselves -They dress decently.
108. **EITHER: Mention one type of prayer in Christianity.**
-Petition prayer -Intercession prayer -Meditation prayer
-Praising prayer -Thanksgiving prayer
- OR: Mention one type of prayer said daily in Islam.**
-Salat al-fajr/Subuhi -Salat al-Zuhr -Salat al-Asr
-Salat al-Maghrib -Salat al-Isha

109. **EITHER: Name symbol used in Christianity.**
 -Cross -Bible -Rosary
- OR: Name one symbol used in Islam.**
 -Crescent/Moon -Star -Tasbih/Tasbihat -Prayer mat -Qura'n.
110. **EITHER: Why did God send Moses to Egypt?**
 -To rescue the Israelites from slavery
- OR: Why did Allah send Musa to Egypt?**
 -To rescue the Banu-Israelites from slavery.
111. **EITHER: Of what value is Lent to a Christian?**
 -Brings a Christian closer to God -Helps a Christian to repent
 -Helps a Christian to read the Bible -Helps a Christian to unite with others
 -Helps a Christian to get blessings -Helps a Christian to avoid sins
- OR: Of what value is Ramadhan to a Muslim?**
 -Brings a Muslim closer to Allah -A Muslim learns Allah's ways
 -A Muslim is forgiven his sins -A Muslim gets blessings from Allah
 -A Muslim avoids sins -Helps a Muslim to concentrate on the Qur'an
 -Strengthens faith. -A Muslim gets rewards from Allah.
112. **EITHER: Mention one miracle Jesus performed.**
 -He cursed the fig trees and they dried -He turned water into wine
 -He walked on water -He calmed the storm
 -He healed Malchus' ear -He raised Lazarus from the dead
 -He healed the bleeding woman -He healed the blind man
- OR: Mention one miracle that Prophet Muhammad performed.**
 -The revelation of the Qur'an -He used to speak to the dead
 -Splitting the moon -He caused two trees to move
 -He caused a well to swell with water -Isra and Miraj
 -He made stones and trees to greet Him
 -He milked a sick camel to feed many people.
 -He made animals to communicate with Him
 -He healed Ali's eye during the battle at Khaybar
 -He made his enemies blind with a handful of dust
 -He looked at Suraq and his horse sank into the earth.
 -He used to feed people with supernatural water and food.
113. **EITHER: According to the Bible, who was the first martyr?**
 -Saint Stephen
- OR: According to Islam, who was the first martyr?**
 -Sumayyah

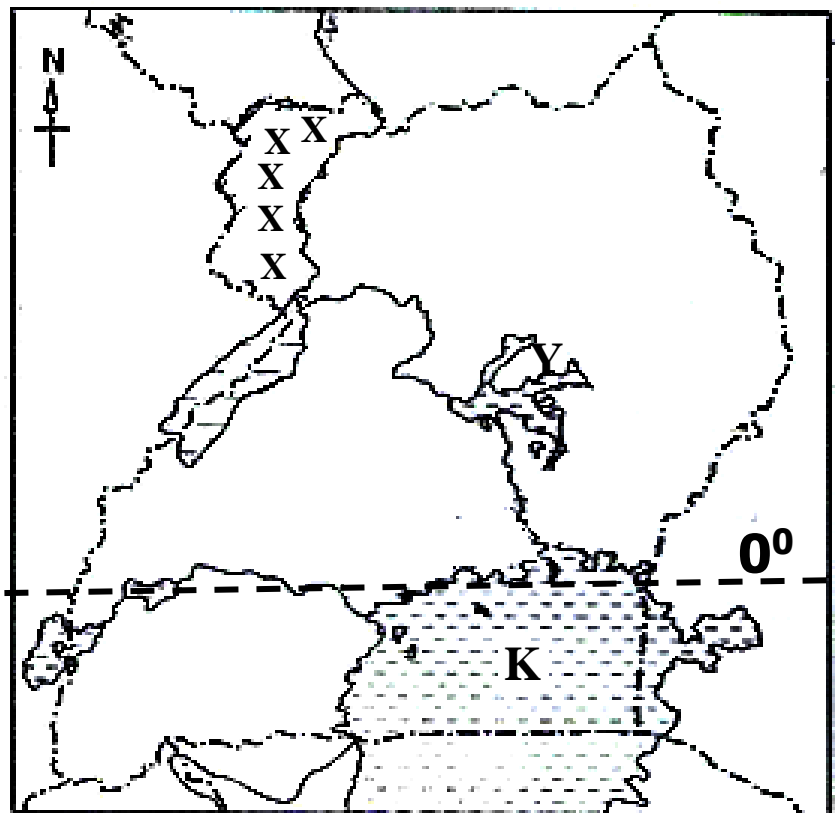
114. **EITHER: Give one item Christians give as an offertory.**
 -Animals -Construction materials -Rosaries -Bibles
 -Birds -Money -Flowers -Fruits -Church wine
 -Candles -Clothes -Food crops
- OR: Give one item Muslims give to Allah for His grace to them.**
 -Money -Mats -Construction materials for the Mosque
 -Food crops -Clothes for the needy -Animals -Qur'an -Birds
115. **EITHER: Why is the sacrament of baptism important in Christianity?**
 -It washes the original sin -It initiates one to God's family
- OR: Why is circumcision an important aspect in Islam?**
 -It is a sign of belonging to a Muslim community.
 -It confirms ones relationship with Allah -For cleanliness/purity
116. **EITHER: Why did God create man in His own image and likeness?**
 -To worship Him
- OR: Why did Allah create man in His own image?**
 -To worship Him
117. **FOR BOTH: Name any one form of suffering.**
 -Physical suffering -Mental/ psychological suffering -Emotional suffering
118. **EITHER: How do Christians use their mouth to serve God?**
 -By preaching the gospel -By singing gospel/hymns -By praying for others
 -By blessings others -By reading Bible in the church
- OR: How do Muslims use their mouth to serve Allah?**
 -By reading the Qur'an -By preaching Islam -By praising Allah
 -By blessings others -By praying for others
119. **EITHER: Who was the father of Isaac according to the Bible?**
 -Abraham
- OR: Who was the father of Ishaq according to Islam?**
 -Prophet Ibrahim
120. **EITHER: Give any one way Christians walk in the righteousness of God.**
 -By fasting -By praying -By preaching the gospel
 -By singing gospel songs. -By reading the Bible -By guiding Others
 -By making pilgrimage to Holy places -By counselling others
 -By attending church services -By paying offertories
 -By paying tithe -By repenting -By forgiving Others

OR: State any way Muslims walk in the righteousness of Allah.

- By forgiving Others
- By repenting
- By reading the Qur'an
- By preaching Islam
- By fasting during Ramadan
- By praying five times a day
- By paying zakat
- By guiding Others
- By counselling Others
- By making pilgrimage to Mecca

SECTION B

Study the map of Uganda below and answer the questions that follow.



121. (a) **Draw the Equator (0°) on the above map.**
-Consider Lake George and Lake Victoria
- (b) **Identify the chief cash crop grown in area xxx.**
-Tobacco
- (c) **How was lake marked Y formed?**
-By down warping.
- (d) **Mention one island district found in lake marked K.**
-Buvuma -Kalangala
122. (a) **Name the British governor who introduced LEGCO in Uganda in 1921.**
-Sir Robert Thorne Coryndon
- (b) **State two reasons why the British introduced LEGCO in Uganda in 1921.**
-To make colonial laws -To amend colonial laws
-To advise colonial government -To plan for development

(c) Why were Ugandans not happy with the formation of LEGCO.

- They were not represented
- They wanted their independence

123. **(a) What is a financial year?**

- This is a period of twelve months over which the government revenue is calculated.

(b) Give two parts of a budget.

- Income
- Expenditure

(c) Mention way the government of Uganda can fight and reduce a deficit budget.

- By increasing taxes
- By fighting smuggling
- By fighting corruption
- By modernising agriculture
- By teaching people the importance of taxes
- By reducing on salaries of government workers
- By allowing more investors
- By promoting industrialization
- By creating market for agricultural produce

124. **(a) What are children's rights?**

- These are natural freedoms entitled to all Children.
- Freedoms children should enjoy.

(b) Give two roles of children at home.

- Fetching water
- Collecting firewood
- Cooking food
- Washing utensils
- Mopping the house
- Washing clothes
- Ironing clothes
- Greeting /respecting elders
- Caring for babies

(c) How are children able to detect that their rights have been abused?

- By denying them food
- By denying them medical care
- By denying them parental love and care
- By isolating them
- Through kidnapping them
- Forcing them to marry
- Raping them
- Through defilement
- Through denying them education

125. **(a) What is meant by the term equinox?**

- This is the period when the sun overheads the equator.

(b) Name the two months when the equinox occurs.

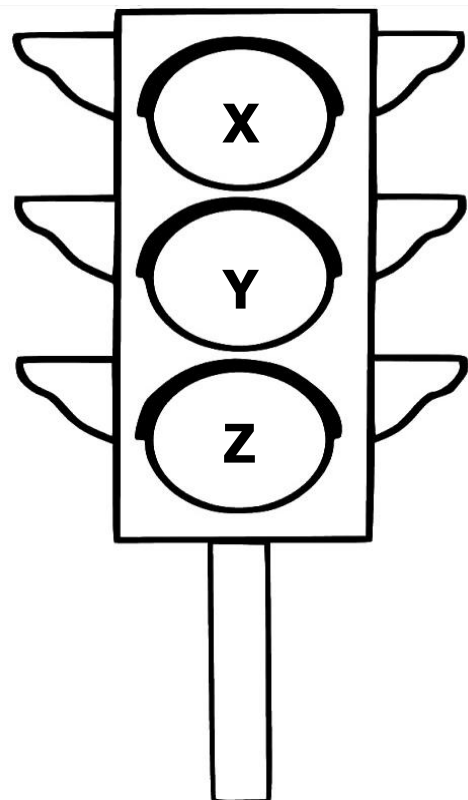
- March
- September

(c) Which earth movement causes day and night?

- Rotation of the earth

126. (a) **Give any two benefits of a high population to a country.**
 -High tax collections -Cheap labour -Ready market for goods
 -Enough security
- (b) **How does a high population affect land?**
 -Leads to land fragmentation
- (c) **Give one reason why the population of Uganda should be controlled?**
 -To reduce pressure on resources. -To ease planning by the gov't.
 -To ease on provision of social service.
127. (a) **What name is given to the estimate of income and expenditure?**
 -Budget
- (b) **Name any two types of estimated income and expenditure.**
 -Balanced budget/ equilibrium budget
 -Deficit budget/loss budget
 -Surplus budget/profit budget
- (c) **What causes over spending?**
 -Lack of a budget -Illegal possession of money -Excitement
 -Ignorance on budgeting -Lack of financial advice -Bad peers
 -Lack of responsibilities -Antisocial behaviour /Alcoholism -Boasting

Study the diagram below and use it to answer the questions that follow.



128. (a) **Identify the traffic lights X, Y, Z.**
X -Red which means to Stop
Y -Yellow which means to Wait or to Get Ready.
Z -Green which means to Go.

(b) Give one cause of road accidents.

- Overloading vehicles
- Speeding of vehicles
- Lack of road signs
- Deployment of corrupt traffic officials
- Poor roads
- Driving vehicles under poor mechanical conditions
- Lack of road safety
- Driving while drunk.
- Poor interpretation of road signs

129. **(a) State one role played by each of the following people in the election process.**

(i) Presiding officer.

- He /she controls or manages the electoral process at a polling station.
- Announces election results at a polling station.

(ii) Polling Assistant.

- He / she helps a presiding officer at a polling station.

(iii) Electorates.

- They participate in voting/ they vote for their leaders

(b) Outline one problem faced by the Electoral Commission while carrying out its duties.

- Shortage of funds
- Corruption
- Delay of Electoral materials
- Poor transport
- Election petitions/Dissatisfaction from candidates
- Poor communication
- Poor government policies
- Shortage of skilled labour
- Ignorance among people
- Election malpractices/rigging elections
- Weather changes
- Poor response from voters
- Destruction of Electoral equipment/ materials

130. **(a) What are pandemic diseases?**

These are diseases that spread over the whole country or the whole world.

(b) Give one reason Corona Virus / COVID 19 is regarded as a pandemic disease.

- It spread over the whole world.

(c) Identify one sector in Uganda that has been greatly affected by COVID 19.

- Education
- Games and sports
- Hotels and restaurants
- Transport
- Tourism
- Entertainment industry

(d) Mention any one measure the government of Uganda has put in place to curb / control COVID 19.

- By advising people to wear face masks
- By enforcing curfew
- By organising scientific campaigns/elections
- By encouraging scientific weddings
- By importing COVID 19 vaccines
- By discouraging mass gatherings
- By encouraging scientific burial
- By closing open/public/community markets

- By advising people to be vaccinated
- By advising people to observe social distancing
- By advising people to sanitize frequently
- By advising people to wash hands frequently with soap
- By advising people to eat nutritious food
- By advising people to engage in physical exercises
- By publishing and displaying poster on preventive measures of covid 19
- By advising people to report COVID 19 related cases.
- By discouraging use of public means of transport
- By discouraging mass wedding
- By closing schools
- By closing bars and night clubs
- By composing lockdown
- By closing churches
- By closing airports

131. **(a) Name any three economic activities that provide raw materials to industries.**

- Fishing
- Mining
- Lumbering
- Farming/agriculture

(b) Name one economic activity that can be carried out in desert areas.

- Tourism
- Irrigation farming
- Transport
- Trade
- Mining
- Rearing camels

132. **(a) Name any two common markets where Uganda is a member.**

- East African Community/EAC
- Common Market for Eastern and Southern Africa/COMESA
- Inter-Governmental Authority on Development/IGAD

(b) Give one way Uganda benefits from being a member of Different common markets.

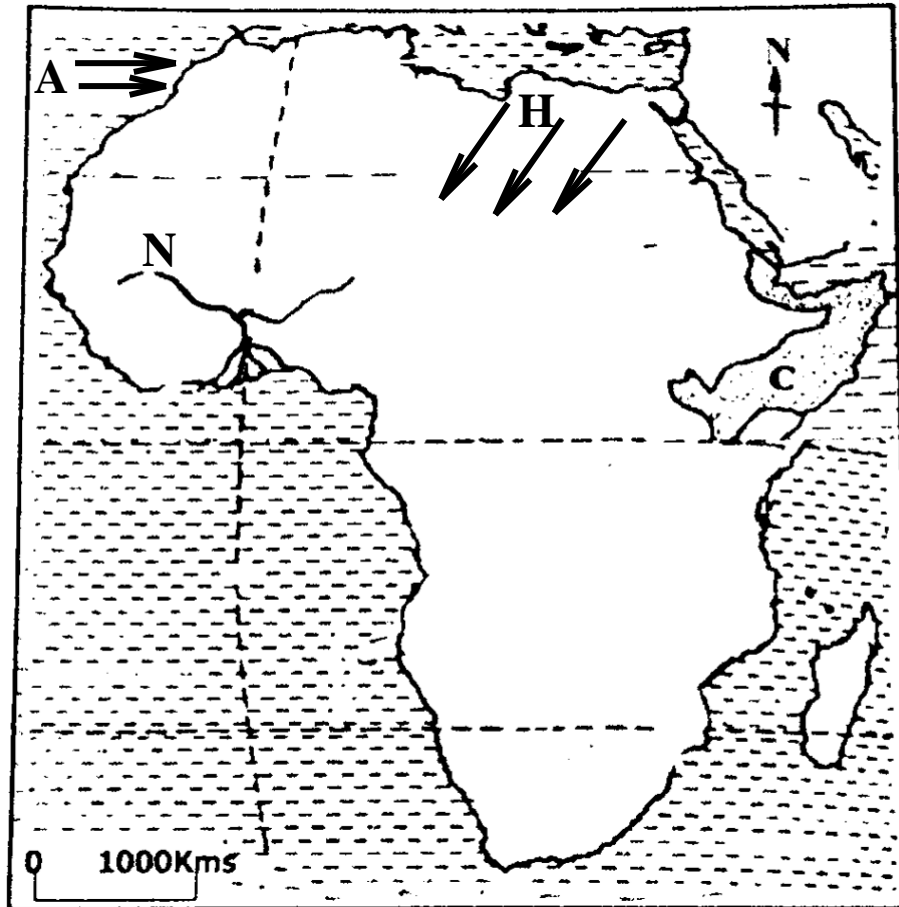
- Ugandans access goods they can't produce
- Uganda is linked to different parts of the world.
- Ugandans enjoy International Trade
- Ugandans access free movement of goods
- Ugandans get a wider market for their goods
- Ugandans get jobs
- Ugandans enjoy peace and security
- Ugandans enjoy International friendship
- Ugandans access sponsorships
- Ugandans improve their science and technology

(c) State any one problem affecting common markets.

- Production of similar goods
- Poor communication network
- Shortage of funds
- Poverty
- Poor transport Network
- Civil wars
- Political differences
- Corruption

133. (a) **Name the main crop which is grown on Kilombero Irrigation Scheme in Tanzania.**
-Sugarcane
- (b) **State any two benefits of Kilombero Irrigation Scheme to people of Tanzania.**
- Creates employment -Source of raw materials to sugar factory
 - Has led to development of infrastructures -Source of income
 - Source of government revenue -Promotes education and research
 - Promotes tourism
- (c) **Mention any one way crop growing can be promoted in Tanzania.**
- Through mechanisation of agriculture
 - Through additional of fertilizer/manure -By using irrigation
 - Using modern farming methods -Promoting agro based industries
 - Providing ready market for agricultural produce
 - Reducing taxes on agricultural equipment
 - Spraying to kill pests and crop diseases
134. (a) **What is vegetation distribution?**
- This is the variation in vegetation of an area.
 - This is how plant life/ vegetation is spread in an area
- (b) **State two factors that affects vegetation distribution.**
- Altitude -Climate/rainfall -Latitude
 - Temperature -Human activities -Water bodies
 - Nature of the soil
- (c) **Name the government body that protects the environment.**
-National Environment Management Authority/NEMA
135. (a) **Give any two natural resources of Uganda.**
- Plants/forests/vegetation -People -Land
 - Animals -Minerals -Air -Sunshine
 - Rainfall/water/water body
- (b) **Give two reasons why natural resources of Uganda have not been fully exploited.**
- Due to low technology -Shortage of market -Corruption
 - Poor government policies -Poor transport Network
 - Remoteness of some areas -Shortage of capital
 - Shortage of skilled labour

Study the map of Africa below and use it to answer the questions that follow.



136. (a) **Name River marked N**
 -River Niger
- (b) **State the effect of the following prevailing winds marked A and H on the climate of Africa.**
- (i) **A** Brings rain
 (ii) **H** Doesn't bring rain
- (c) **Mention one country found in region C.**
 -Somalia -Ethiopia -Eritrea -Djibouti
137. (a) **What do you understand by the term government?**
 -Is a group of people responsible for controlling a country.
 -Is a group of people given executive powers to rule and govern a Country.
- (b) **State two arms of a democratic government.**
 -Legislature/parliament -Judiciary -Executive
- (a) **Why should a democratic country like Uganda have a constitution?**
- To promote democracy -To promote peace -To promote security
 - To promote peaceful change of government
 - To promote respect for human rights -To promote law and order
 - To promote competitive politics -To guide political leaders
 - To state the powers of each organ of government

138. (a) **Name any one military leader of the Mau-Mau rebellion in Kenya.**

- General China/ Waruhiu Itote -Field Marshal Dedan kimathi
- Field Marshal Musa Mwariama -General Baimungi
- Field Marshal Muthoni Kirima -Stanley Mathenge

(b) **State two ways Mau-Mau benefited the people of Kenya.**

- It enabled Kenyans to get independence -It increased patriotism
- It led to abolition of Kipande system -It increased nationalism
- It led to abolition of forced cheap labour -It promoted Unity
- Kenyans were able to regain their land
- Africans started growing their Cash crops
- It led to reduction of racial segregation
- It led to preservation of African culture
- Kenyans started enjoying their rights
- It increased a sense of belonging
- It promoted friendship and cooperation

(c) **Why was the Mau-Mau rebellion popular in Kenya?**

- It demanded/fought for kenya's independence/freedom
- It fought against human rights abuse -It advocated for patriotism
- It advocated for nationalism -It fought against land grabbing
- It fought against Colour bar/ racial segregation
- It fought against forced cheap labour
- It fought against the kipande system
- It fought against over taxation

139. **Fill in to complete the table below correctly.**

Political unit	Political leader
District	_____
_____	L. C. III Chairperson
Parish	_____
_____	L. C. I Chairperson

- DistrictLCV CHAIRPERSON
- Subcounty.....LCII CHAIRPERSON
- Parish.....LCIII CHAIRPERSON
- Village.....LCI CHAIRPERSON

Asiimwe and Atang earn a monthly salary of 50,000 shillings and they make their monthly expenditure as follows.

<u>ASIIMWE'S EXPENDITURE</u>		<u>ATANG'S EXPENDITURE</u>	
Medical	- shs. 20,000	Medical	- shs. 20,000
Transport	-shs. 20,000	Transport	-shs. 10,000
Fees	-shs. 20,000	Fees	-shs. 10,000
		Savings	-shs. 10,000

140. **(a) Which type of budget does each make?**

- (i) **Asiimwe** Deficit budget/loss budget
(ii) **Atang** Surplus budget/profit budget

(b) Give a reason for each of your answer in (a) above.

- (i) Asiimwe
• Expenditure is greater than income
(ii) Atang
• Income is greater than expenditure

141. **(a) What are social activities?**

These are activities which bring people together during Joy or sorrow.

(b) State two examples of social activities.

- Burial -Circumcision -Funeral rites
- Marriage/introduction ceremonies -Graduation ceremonies
- Birthday celebration -Naming Children -Cleaning wells
- Constructing roads especially in villages
- Harvesting of some crops (millet, rice, maize, sorghum, tea, sugarcane)

(c) Why are social activities important in society?

- Promote peace -Promote security -Promote unity
- Promote friendship and cooperation -Promote hardworking
- Promote culture -Promote morals -Promote development

142. **(a) What is climate change?**

-These are variations of weather patterns for a long time.

(b) State two causes of climate change.


- Altitude -Ocean currents. -Vegetation of an area
- Distance from the Equator / Latitude
- Winds
- Relief

- Human activities like,
Deforestation/ lumbering /Bush burning /Swamp drainage
Industrialization/ fumes/Overgrazing /Mining
Garbage/poor disposal of wastes/ Burning of wastes

(c) Name the UN Agency that is responsible for controlling droughts in the world.

- United Nations Environment Programme/UNEP

Use the diagram below to answer questions that follow.



(a) Name the type of rainfall shown above.

- Convectional rainfall

(b) How does the sun help in the formation of the above rainfall?

- Heats the water body which leads to evaporation.
- Heat from the sun leads to evaporation

(c) Apart from transpiration, name any other two processes that take place in the above rain cycle.

- Condensation -Transpiration -Heating from the sun
- Precipitation

143. **(a) Write IBEACO in full.**

- Imperial British East Africa Company

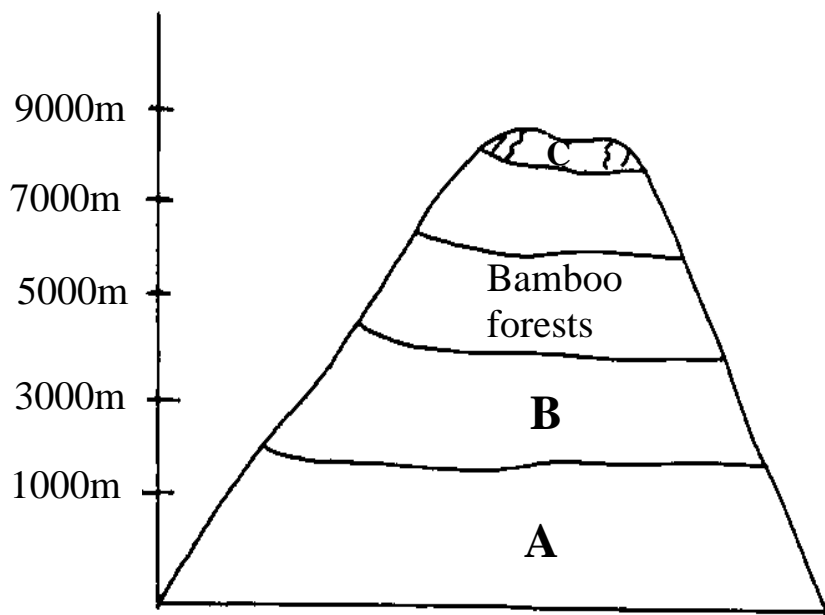
(b) State two reasons for the formation of IBEACO.

- To trade -To stop slave trade -To protect missionaries
- To establish colonial(British) rule

(C) State the main reason for the withdrawal of IBEACO activities in East Africa.

- It ran bankrupt/shortage of funds

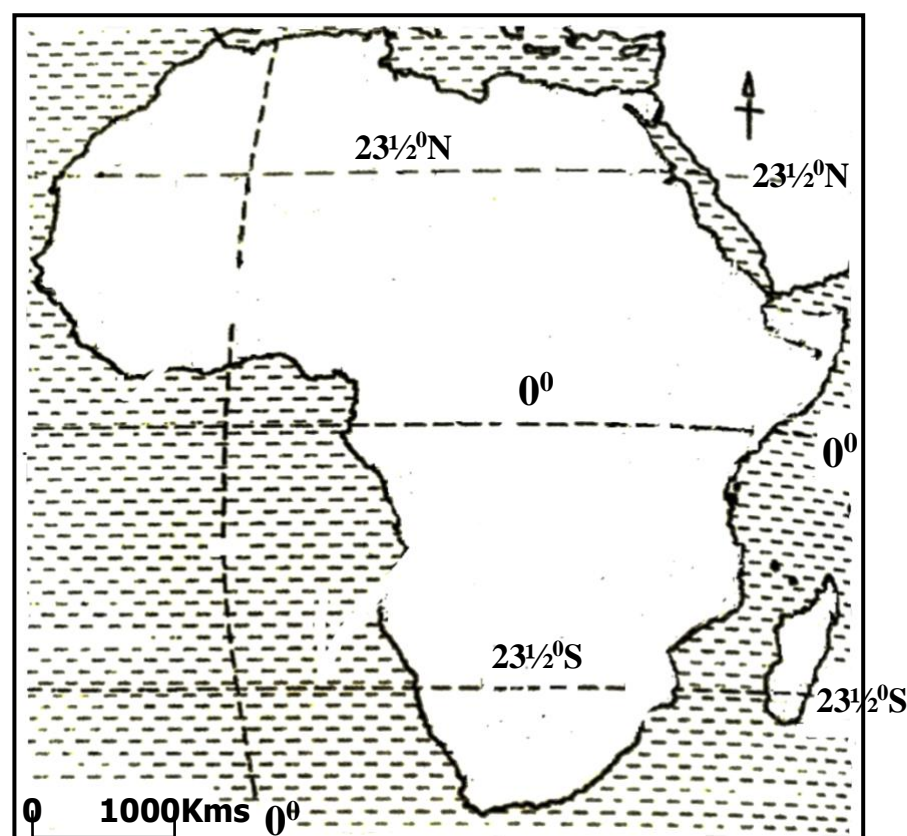
Use the diagram below to answer the questions that follow.



144. (a) **Why is tourism the main economic activity in A.**
- There is savannah grassland which favours the establishment of games parks.
- (b) **What type of wood is obtained from area B?**
- Hardwood
- (c) **Give a reason why vegetation changes in the diagram above.**
- Due to difference in altitude
- (d) **Why is there no vegetation growth in region C?**
- Due to presence of snow/ it is snowcapped
145. (a) **Identify the chief mineral mined in the following areas.**
- (i) **Wit-waters Rand in South Africa**
- Gold
- (ii) **Osukuru Hills in Tororo**
- Limestone
- (b) **Why is mining called an industry?**
- It is a source of income -Source of government revenue
 - Develops infrastructures -Source of employment
- (d) **Give one problem faced by the mining industry in African countries.**
- Poor government policies -Civil wars/rebel activities
 - Poor transport Network -Poor communication network
 - Shortage of skilled labour -Shortage of capital
 - Scattered small mineral deposits -Remoteness of some areas
 - Collapsing of mines -Suffocation of miners
 - Shortage of capital -Illegal mining
 - Low level of technology -Flooding of mines

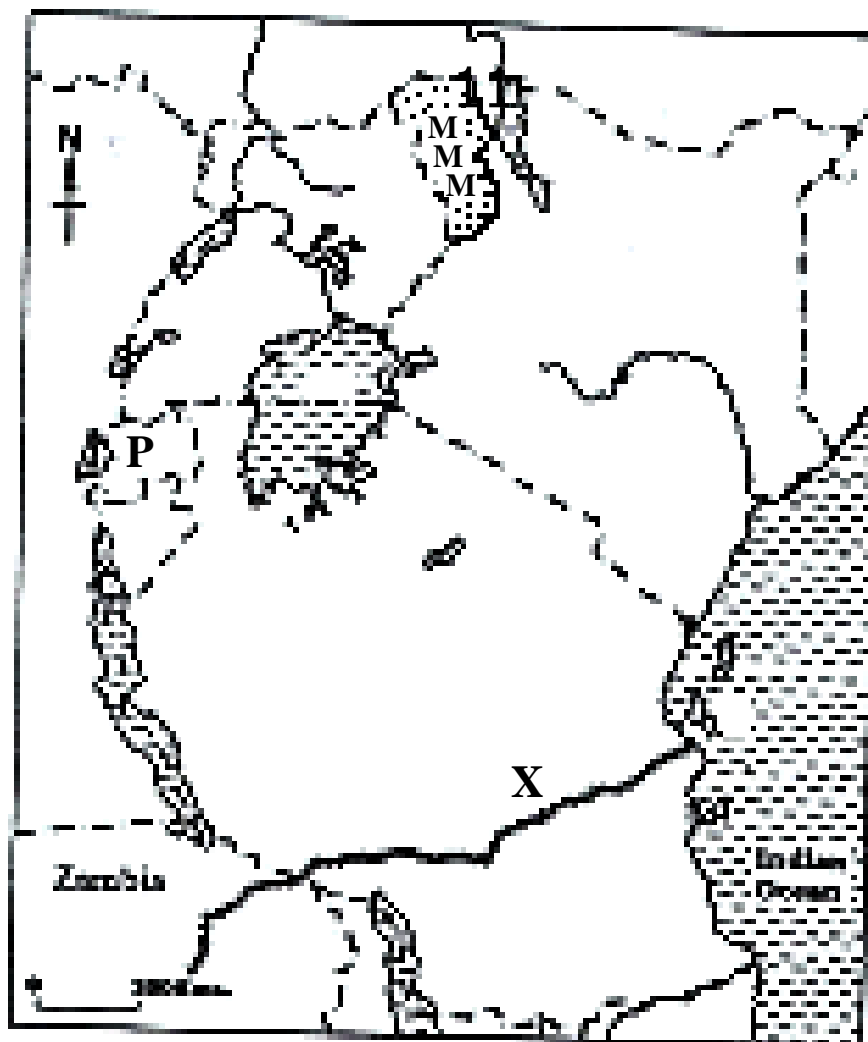
146. (a) **Write 'SOP' in full as was put in place by the Ministry of Health.**
- Standard Operating Procedures
- (b) **Give any two 'SOP' measures that were put in place by the Ministry of Health as strategy of reducing the spread of Corona Virus.**
- Putting on face masks -Washing hands with soap regularly
 - Sanitizing hands -Observing social distancing
 - Isolating suspected covid 19 cases/patients and contacts
 - Quarantining contacts and suspected cases
- (c) **How has COVID 19 disease affected the economic development of Uganda?**
- Has led to closure of schools which employ people
 - Has retarded investment -Has led to poverty
 - Has led to unemployment -Shortage of labour
 - Many hotels, bars and lodges are closed. -Has increased tax defaulting
 - Has retarded local and international tourism
 - Has led to retrenchment/curtailment/ reduction in number of workers in a companies -Has retarded international and local trade
 - Has led to loss / shortage of market for some goods
 - Has led to invention of covid 19 equipment/tools/ drugs to fight covid 19 disease.
 - New industries have emerged to produce COVID 19 equipment/tools and drugs
 - Has retarded international flights
 - Has increased government expenditure on COVID 19 vaccines , other equipment or tools and research

Study the map of Africa below and answer the questions that follow.



147. (a) **Name the latitude marked 0° .**
- Equator
- (b) **What name is given to the region between latitudes marked $23\frac{1}{2}^{\circ}$ N and $23\frac{1}{2}^{\circ}$ S?**
- The Tropics
 - Tropical region
- (C) **Name one African country crossed by the latitude marked,**
- (i) **$23\frac{1}{2}^{\circ}$ North**
- Egypt -Libya -Algeria
 - Niger -Mali -Mauritania
- (ii) **0°**
- Somalia -Kenya -Uganda - Gabon
 - Democratic Republic of Congo (DRC)
 - Republic of the Congo/Congo Brazzaville
 - Sao Tome and Principe

Study the map of East Africa below and use it to answer the questions that follow



148. (a) **Why is plantation farming difficult in country P on the map above?**
- Due to shortage of land
 - The area is mountainous/Has many hills or highlands
- (b) **Why was the railway line marked X built?**
- To connect Zambia to the coast of East Africa
 - To ease transportation of minerals (copper)

(c) Why was the area marked MM transferred to Kenya during the evolution of boundaries?

- To separate the Turkana from the Karimojong
- To control cattle rustling among the Turkana and the Karimojong

(d) Apart from the railway marked X, name any other railway in East Africa.

- Usambara railway/ Tanga-Korogwe railway
- Uganda-Kenya railway

149. **Match items in list A to the phrases in List B correctly.**

List A

- (i) Coffee
- (ii) Oil palm
- (iii) Cloves
- (iv) Pyrethrum

List B

- For making insecticides.
- For making perfumes.
- For making gun powder.
- For making candles.

- **Coffee** for making gun powder
- **Oil palm** for making candles
- **Cloves** for making perfume
- **Pyrethrum** for making insecticides

RELIGIOUS EDUCATION.

150. **EITHER:**

(a) Why did Jesus have apostles?

- To protect him -To help him to preach the gospel
- To give him company.
- To continue with his ministry in his absence

(b) State two ways Jesus showed concern to people around Him.

- He healed the sick -He raised the dead -He fed the hungry
- He forgave the sinners -He healed the blind

(c) Why was Jesus hated by the Jews?

- He called himself the son of God
- He called himself a King of the Jews
- He promised to break the temple and build it in three days
- He broke the Sabbath
- He preached against their way of worship

OR:

(a) Who were the Caliphs?

- These were successors of Prophet Muhammad.

(b) Name any two Caliphs.

- Caliph Abu Baker -Caliph Umar
- Caliph Uthiman -Caliph Ali

(c) State anyone way Prophet Muhammad showed concern to people around him.

- He fed the hungry -He healed the sick
- He prayed for people -He provided water to the needy

151. **EITHER:**

(a) Where does the Authority come from?

- God -Satan -Bible -National constitution
- Marriage certificate/wedding rings -Appointments/Tags/uniforms

(b) State two types of Authority in Christianity.

- Divine authority -Apostolic authority -Satanic authority
- Symbolic authority -Marital authority -Civil authority

(c) Which type of Authority is possessed by a head boy of your school?

- Civil authority

OR:

(a) Where does Authority come from?

- God -Satan -Qur'an/Koran -National constitution
- Marriage certificate/wedding rings -Appointments/Tags/uniforms

(b) State any two types of Authority in Islam.

- Divine authority -Apostolic authority -Satanic authority
- Symbolic authority -Marital authority -Civil authority

(c) Which type of Authority is possessed by a head boy of your school?

- Civil authority

152. **EITHER:**

(a) State two ways Christians prepare for heaven.

- By praying -By Repenting -By helping the needy
- By fasting -By forgiving Others -By appreciating others
- By preaching the gospel -By reading the Bible

- By composing gospel songs -By singing gospel songs
- By attending church services -By using our talents to serve God
- By offering selfless service -By sharing
- By following the Ten Commandments -By accepting Jesus Christ
- By asking for forgiveness -By promoting justice

(b) State two reasons why some Christians will fail to see Heaven.

- They don't repent -They are indisciplined -They don't forgive
They don't offer selfless service -They are selfish
- They don't follow the Ten Commandments -They don't read the Bible
- They don't attend church services - They doubt God's existence
- They don't use their talents to serve God
- They involve in sexual immorality/deviations

OR:

(a) State two ways Muslims prepare for Allah's grace in heaven.

- By praying -By repenting -By helping the needy
- By fasting -By forgiving Others -By appreciating others
- By preaching Islam -By reading the Qur'an
- By attending prayers on Friday -By using our talents to serve Allah
- By offering selfless service -By following the Hadith
- By accepting prophet Muhammad as the last messenger of Allah
- By sharing -By asking for forgiveness -By promoting justice

(b) State two reasons why some Muslims will go directly to Hell.

- They don't repent -They are indisciplined -They are selfish
- They don't offer selfless service -They don't forgive
- They don't follow the Hadith -They doubt Allah's existence
- They don't read the Qur'an -They don't attend prayers on Friday
- They don't use their talents to serve Allah
- They involve in sexual immorality/deviation

153. **EITHER:**

(a) Give two ways God communicates to His people.

- Through vision -Through prophets -Through Angels
- Through the Bible -Through dreams

(b) Identify two ways people communicate to their God.

- Through reading the Bible -Through fasting
- Through praying -Through singing gospel

OR:

(a) Give two ways Allah communicates to His people.

- Through vision -Through prophets -Through Angels
- Through the Qur'an -Through dreams

(b) Identify two ways Muslims communicate to Allah.

- Through reading the Qur'an -Through fasting
- Through praying

154. **FOR BOTH:**

(a) Identify two religious organizations that have promoted the needs of Ugandans.

- Watoto -ADRA -CCF -YMCA
- YWCA -Mothers Union -The Scripture Union
- UJCC -UMSC
- IRCU -Back to the Bible Truth -Islamic Relief Agency

(b) Outline two ways religious organizations have promoted the needs of the Ugandans.

- They have set up orphanages -They have set up schools
- They have set up hospitals -They have set up radio station
- They have built homes for some people -They provide food to people
- They have set up Television stations -They pray for the sick people
- They have advocated for human rights -They promote reconciliation
- They have given financial assistance to people
- They preach against domestic violence -They guide and counsel people
- They provide shelter to people -They provide clothes to people

155. **EITHER:**

(a) Who were the first two apostles called by Jesus?

- Simon Peter -Andrew

(b) Outline two things that happened shortly after the death of Jesus Christ on the cross.

- The curtain hanging in the Temple was torn in two from top to bottom.
- The earth shook
- The rocks split apart
- The graves broke open
- Many of God's people who had died were raised to life.

OR:

(a) What is Hadith in Islam?

- Are the sayings and actions of Prophet Muhammad.
- Are the sayings, actions and silent approvals of Prophet Muhammad.

(b) Give one proper way of keeping the Qur'an.

- Muslims ladies are forbidden from touching the Quran during menstruation -Should not allow the Qur'an to touch the ground
- Should not leave the Qur'an open after reading
- Should not use the Qur'an as a pillow
- Should not take the Qur'an into impure places such as the bathroom.

(c) State two reasons why Muslims read the Qur'an.

- To come closer to Allah -To get blessings
- To understand Allah's instructions -To be forgiven their sins
- To go to paradise (Janna)

156. **EITHER:**

(a) What is Success?

- This is the achievement of a desired goal.

(b) Mention two causes of Success in Christianity.

- Hardworking -Praying -Fasting -Reading the Bible
- Discipline -Respect for others -Friendship and cooperation
- Guidance and counseling -Peace and security -Mentorship
- Determination -Education level -Good family background

(c) Identify one thing which makes a Christian fail in life.

- Laziness -Indiscipline -Disobedience -Disunity
- Poor family background -Lack of education
- Lack of guidance and counseling -Insecurity -Poor mentorship
- Pride -Lack of respect for God and others -Unfaithfulness

OR:

(a) What is Success in Islam?

- This is the achievement of the desired goals

(b) Outline two causes of Success in Islam.

- Hardworking -Praying -Fasting -Reading the Qur'an
- Discipline -Respect for others -Friendship and cooperation
- Guidance and counseling -Peace and security -Mentorship
- Determination -Education level -Good family background

(c) Identify one thing which makes a Muslim fail in life.

- Laziness -Indiscipline -Disobedience -Pride
- Poor family background -Lack of education -Insecurity
- Lack of guidance and counseling -Poor mentorship
- Lack of respect for Allah and others -Disunity -Unfaithfulness

157. **EITHER:**

(a) What is Talent?

- Is a natural ability to do something well.
- Is a God given gift.

(b) State two ways talents can be improved.

- Through guidance and counselling
- Through practice/ concentration
- Through prayers and fasting
- Through getting support from others

(c) How do Christians use their talents to serve God?

- By composing gospel
- By preaching the gospel/ word of God
- By dancing for God
- By guiding and counseling Others
- By helping the needy
- By reading the Bible
- By singing gospel
- By acting movies against evils

OR:

(a) What is Talent in Islam?

- Is a natural ability to do something well.
- Is a given gift from Allah

(b) In which two ways can talents be improved in Islam?

- Through guidance and counselling
- Through practice/ concentration -Through prayers and fasting
- Through getting support from others

(c) How do Muslims use their talents to serve Allah?

- By preaching Islam
- By guiding and counseling Others
- By helping the needy
- By reading the Qur'an

158. **EITHER:**

(a) What is Holy Trinity?

- Is the existence of God in three persons.

(b) Name the three persons who make up the Holy Trinity.

- God the Father
- God the Son
- God the Holy Spirit

OR:

(a) What is Saum?

- This is fasting in Islam.
- This is an act of abstaining from food, drinks, smoking and sexual activities during Ramadan.

(b) Name any three groups of people exempted from fasting in Islam.

- Travelers -Babies
- The sick -Women in menstrual cycle
- The elderly -The pregnant
- The breastfeeding mothers

159. **EITHER:**

"A virgin will become pregnant and have a son and he will be called Emmanuel"
Mathew: 123

(a) Who said the above words?

- Angel Gabriel

(b) To whom were the above words said?

- Joseph

(c) Why were the above words said?

- Joseph wanted to break the engagement privately.
- Joseph was hesitating to take Mary.

(d) What lesson do you learn from the above statement?

- To believe in God -To respect God's message
- To respect God's messengers
- Never leave your partner -Be faithful
- We should not break our engagement

OR:

“Read! Read! In the name of your Lord who created man in a clot of blood.”
Surat Alaq.

(a) Who said the above words?

- Angel Gabriel/ Jibril

(b) To whom were the above words said

- Prophet Muhammad

(c) Why were the above words said?

- The prophet was hesitating to read
- Prophet Muhammad didn't know how to read.
- The prophet was on a retreat in the Caves of Hira

(d) What lesson do you learn from the above statement?

- To be obedient
- To trust Allah
- To read the Qur'an
- To respect Allah's messengers
- To be faithful
- To call on Allah during trouble
- To respect the quran
- To pray all time.

160. **EITHER:**

(a) Name the mountain where the Ten Commandments were given to man.

- Mount Sinai/Horeb

(b) Who received the Ten Commandments from God?

- Moses

(c) Give any two importance of the Ten Commandments to man.

- Promote morals/respect
- Promote Friendship
- Promote order in the society
- Help us to understand God's Will
- It protect us from sinning
- Promote love
- Promote unity
- Bring us closer to God
- Promote peace and security

OR:

(a) Name the mountain where Prophet Muhammad received the first revelation.

- Mount Noor / Nuru

(b) Which angel brought the first revelation to Prophet Muhammad?

- Angel Gabriel /Jibril

(c) Give any two ways Muslims show obedience to Allah.

- By fasting -By paying zakat
- By making pilgrimage to Mecca
- By sacrificing animals
- By reading the Qur'an
- By preaching Islam
- By helping the needy
- By praying five times a day

161. **EITHER:**

(a) What is charity?

- This is an activity or gift that benefits the public at large.
- Is the giving of money, food or help (alms) to people in need.

(b) Give any two acts of charity you know.

- Donating clothes -Donating blood
- Paying medical bills for sick people
- Volunteering/ engaging in voluntary work
- Fund raising -Sponsoring Children
- Building orphanages -Helping street Children
- Adopting street Children -Helping refugees
- Donating money -Donating food

(c) Why is it important to give charity?

- Enables people to go to heaven
- You get blessings
- Your sins are forgiven
- It promotes friendship
- It promotes respect
- It reduces on crimes rates
- It reduces on suffering
- It helps the poor
- It brings us closer to God
- It promotes unity
- It encourages development

OR:

(a) What is zakat?

- Is giving alms.

(b) Give any two items paid as zakat.

- Food
- Clothes
- Money
- Minerals (gold)
- Animals

(c) Give any one reason why a Muslims should give zakat

- To go to paradise (Janna) -You get blessings
- Your sins are forgiven -It promotes friendship
- It promotes respect
- It reduces on crimes rates It reduces on suffering
- It helps the poor
- It brings us closer to Allah
- It promotes unity
- It encourages development

162. **EITHER:**

"Where is the baby born to be the king of the Jews? We saw his star when it came up in the east, and we have come to worship him."

(a) Who said the above words?

- The Magi/ The three Wise men

(b) Who was being referred to as "the baby born to be the king"?

- Jesus

(c) Why did the visitors want to see the baby born to be the king?

- To worship Him
- To give him gifts
- To prove the Angels message
- To see the new king of the Jews

(d) Why was King Herod unhappy with the news of the baby born to be the king?

- He feared the baby born to overthrow him/ take over his kingdom
- He thought that baby Jesus was to take over his kingdom.

OR:

(a) What does the word Iman mean?

- It means faith

(b) Mention any two pillars of Iman.

- Belief in Allah
- Belief in Angels
- Belief in the books of Allah(Holy books)
- Belief in Allah's prophets and that Muhammad is the last prophet
- Belief in the Day of Judgment
- Belief in the Qadhaa and Qadr (Doom and Divine Decree)

(c) Give any one way Muslims show their Iman.

- By fasting
- By praying five times a day
- By paying zakat
- By making pilgrimage to Mecca
- By believing in the book of Allah
- By believing in Angels
- By believing in Allah's messengers
- By going for congregation prayers every Friday

END